

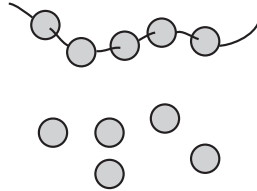


Primary 1 Maths

1. There are 10 beads on a string.

_____ of them drop off.


_____ beads are left.



2. There are _____ animals altogether.

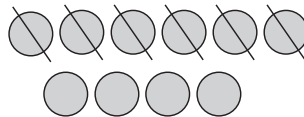
4 of them are horses.

There are _____ gorillas.



3. Complete the number sentence.

_____ - _____ = 4




Complete the subtraction sentences for Questions 4 and 5.


4. $6 - 5 =$ _____



5. $10 - 2 =$ _____



Publisher: EPH



**DIAGNOSTIC
PRACTICE IN
MATHS**

Primary 1

Scan the QR code for
the Answer Sheet.





Primary 1 Maths

Complete each subtraction sentence for Questions 6 and 7.

6. (a) $3 - 1 = \underline{\hspace{2cm}}$

(b) $8 - 7 = \underline{\hspace{2cm}}$

7. (a) $5 - 2 = \underline{\hspace{2cm}}$

(b) $10 - 6 = \underline{\hspace{2cm}}$

8. There are 7 cups.

2 of them are broken.

$7 - 2 = \underline{\hspace{2cm}}$ There are $\underline{\hspace{2cm}}$ cups left.



9. There are 9 books altogether.

How many books are there in the box?

$\square \bigcirc \square = \square$

There are $\underline{\hspace{2cm}}$ books in the box.

